

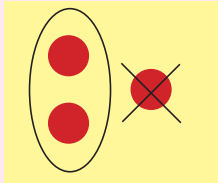
mighty maths!



THAT'S ODD


Count the total number of bubbles – that's your odd number. Then, circle the bubbles in pairs and cross the odd bubble out. To find the even number, count the total number of bubbles in the circles.

Example




Odd _____

Even _____




Odd _____

Even _____




Odd _____

Even _____



Odd _____

Even _____



Odd _____

Even _____

riddle-me-dee

What does a brood of chickens say to a duck?

Answers: (odd) 3, 5, 7, 9, 11, (even) 2, 4, 6, 8, 10

Ans: You're the odd one out!